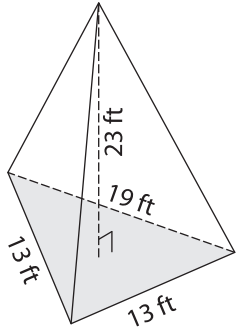


Name : _____

Volume - Triangular Pyramid

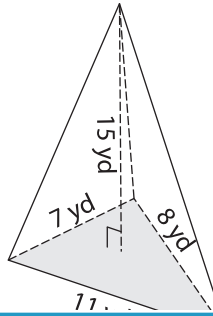
Find the volume of each triangular pyramid. Round your answer to two decimal places.

1)

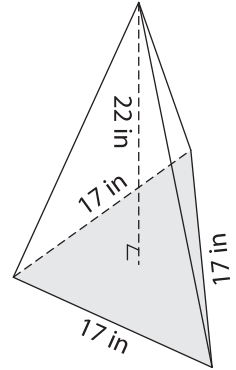


Volume = _____

2)

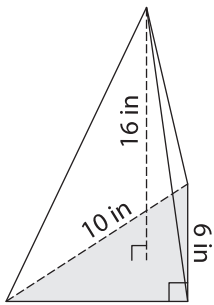


3)



Volume = _____

4)



Volume = _____

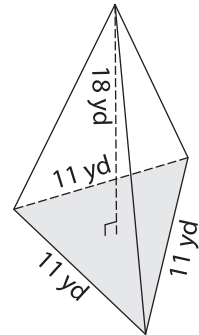
PREVIEW

Gain complete access to the largest collection of worksheets in all subjects!

Members, please log in to download this worksheet.

Not a member? Please sign up to gain complete access.

www.mathworksheets4kids.com



Volume = _____

7) The base of a pyramid is a _____ and the height of the pyramid is _____.

Determine the volume, if _____.

8) The height of a triangular pyramid is 13 yards. If the sides of the base triangle measure 21 yards, 20 yards and 14 yards, find the volume of the triangular pyramid. Round your answer to two decimal places.
