

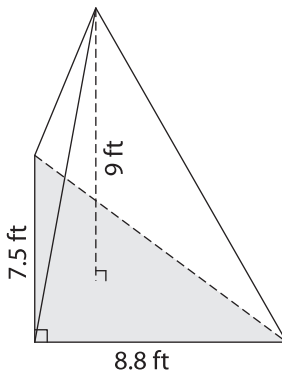
Name : _____

Volume - Triangular Pyramid

Decimals: S1

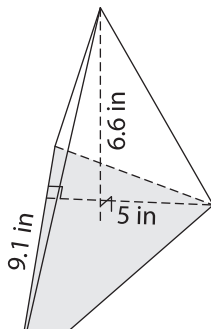
Find the volume of each triangular pyramid. Round your answer to two decimal places.

1)

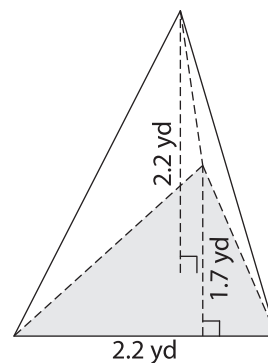


Volume = _____

2)

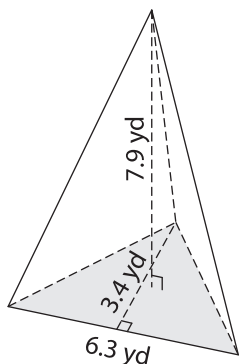


3)



Volume = _____

4)



Volume = _____

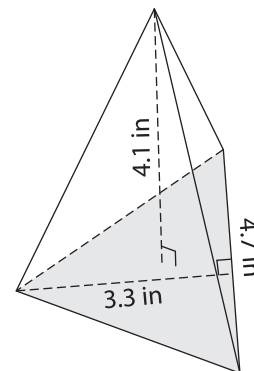
PREVIEW

Gain complete access to the largest collection of worksheets in all subjects!

Members, please log in to download this worksheet.

Not a member? Please sign up to gain complete access.

www.mathworksheets4kids.com



Volume = _____

7) The base of a pyramid is a right triangle with legs measuring 6 inches and 8 inches. The height of the pyramid is 10 inches. Find the volume.

8) The base of a pyramid is a right triangle with legs measuring 4.8 yards and 2.5 yards. If the height of the pyramid is 6 yards, determine the volume.
