

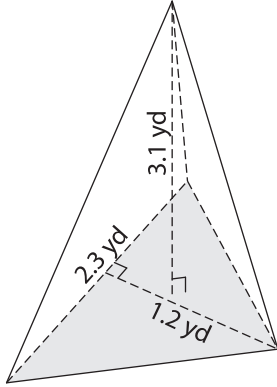
Name : \_\_\_\_\_

## Volume - Triangular Pyramid

Decimals: S3

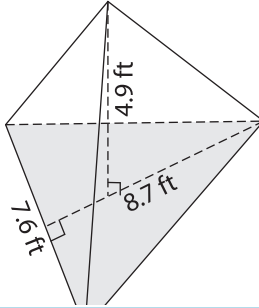
Find the volume of each triangular pyramid. Round your answer to two decimal places.

1)

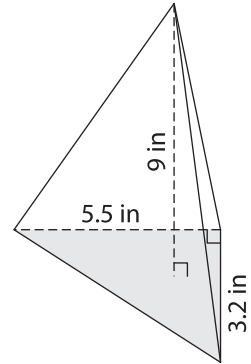


Volume = \_\_\_\_\_

2)

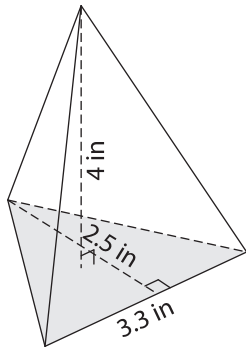


3)



Volume = \_\_\_\_\_

4)



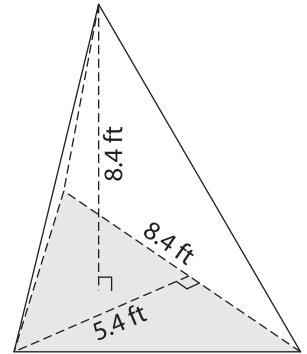
Volume = \_\_\_\_\_

**PREVIEW**  
Gain complete access to the largest collection of worksheets in all subjects!

Members, please log in to download this worksheet.

Not a member? Please sign up to gain complete access.

[www.mathworksheets4kids.com](http://www.mathworksheets4kids.com)



Volume = \_\_\_\_\_

7) The base of a pyramid is a triangle with a base of 4.2 yards and a height of 3.5 yards. If the height of the pyramid is 4.2 yards, find the volume.

\_\_\_\_\_ yards. If the height of the pyramid is 4.2 yards, find the volume.

8) The base of a pyramid is a triangle whose base is 9.9 feet and height is 7.8 feet. Determine the volume, if the height of the pyramid is 5.1 feet. Round your answer to two decimal places.