

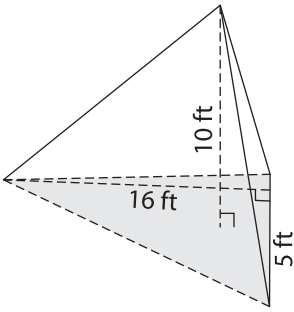
Name : _____

Volume - Triangular Pyramid

ES1

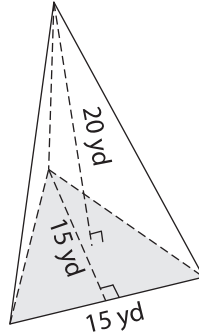
Find the volume of each triangular pyramid. Round your answer to two decimal places.

1)



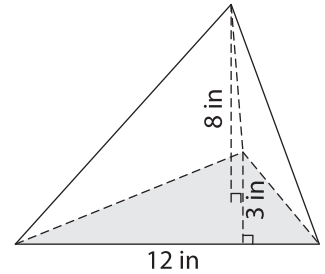
Volume = _____

2)



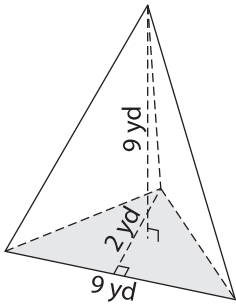
Volume = _____

3)



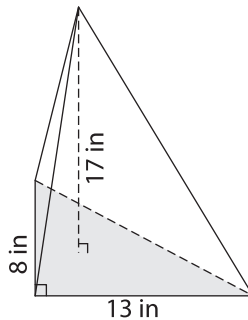
Volume = _____

4)



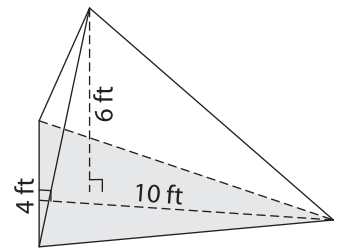
Volume = _____

5)



Volume = _____

6)



Volume = _____

7) The base of a pyramid is a triangle with a base of 1 inch and a height of 5 inches. Find the volume of the pyramid, if its height is 14 inches. Round your answer to two decimal places.

8) The base of a pyramid is a triangle whose base is 11 yards and height is 19 yards. Determine the volume of the pyramid, if its height is 7 yards. Round your answer to two decimal places.
