

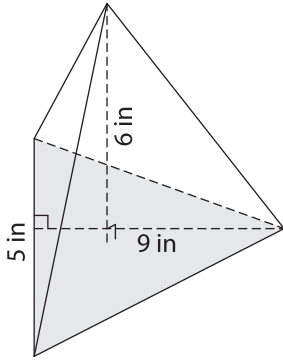
Name : \_\_\_\_\_

# Volume - Triangular Pyramid

ES3

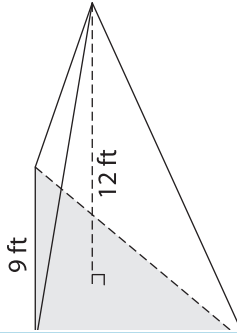
Find the volume of each triangular pyramid. Round your answer to two decimal places.

1)

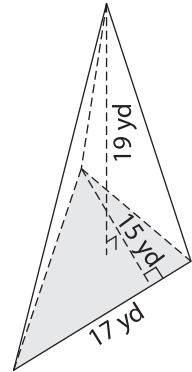


Volume = \_\_\_\_\_

2)

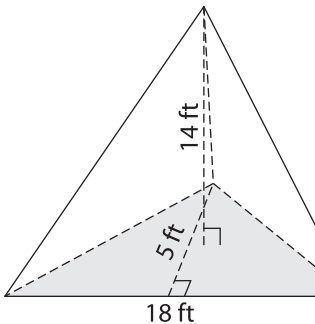


3)



Volume = \_\_\_\_\_

4)



Volume = \_\_\_\_\_

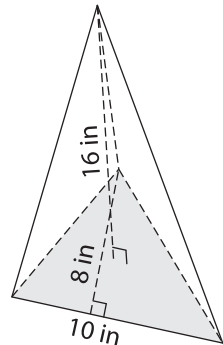
## PREVIEW

Gain complete access to the largest collection of worksheets in all subjects!

Members, please log in to download this worksheet.

Not a member? Please sign up to gain complete access.

[www.mathworksheets4kids.com](http://www.mathworksheets4kids.com)



Volume = \_\_\_\_\_

7) The base of a pyramid is a triangle with a base of 12 feet and a height of 5 feet. Find the volume of the pyramid, if its height is 3 feet.

Find the volume of the

\_\_\_\_\_

8) The base of a pyramid is a triangle with a base of 20 yards and a height of 9 yards. Determine the volume of the pyramid, if its height is 4 yards.

\_\_\_\_\_