

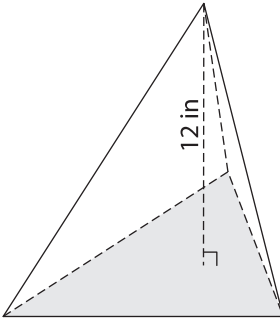
Name : _____

Volume - Triangular Pyramid

Integers: S2

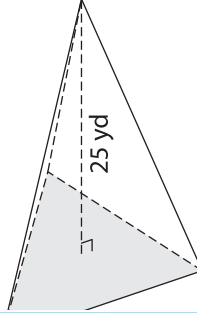
Find the volume of each triangular pyramid. Round your answer to two decimal places.

1) Base Area = 28 in^2



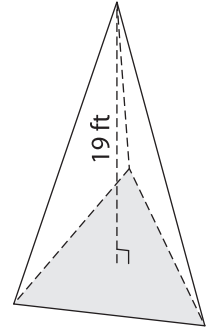
Volume = _____

2) Base Area = 51 yd^2

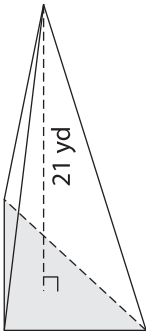


Volume = _____

3) Base Area = 90 ft^2

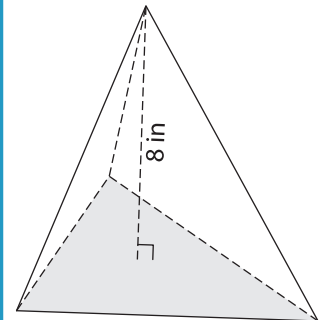


4) Base Area = 125 yd^2



Volume = _____

Base Area = 34 in^2



Volume = _____

7) The height of a triangular pyramid is _____.

Base Area = _____, find the volume of the pyramid.

PREVIEW

Gain complete access to the largest collection of worksheets in all subjects!

Members, please log in to download this worksheet.

Not a member? Please sign up to gain complete access.

www.mathworksheets4kids.com

8) The base area of a triangular pyramid is 85 square feet. Determine the volume, if its height is 20 feet. Round your answer to two decimal places.