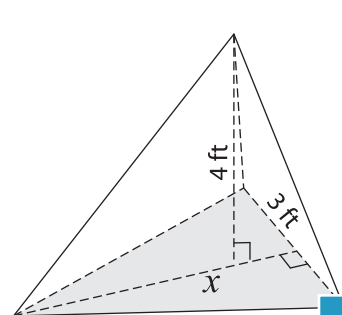


# Volume - Triangular Pyramid

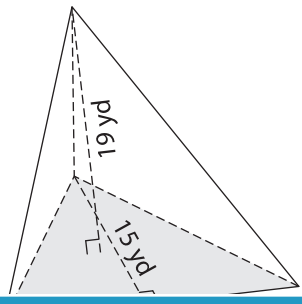
Find the value of  $x$ .

1) Volume =  $20 \text{ ft}^3$

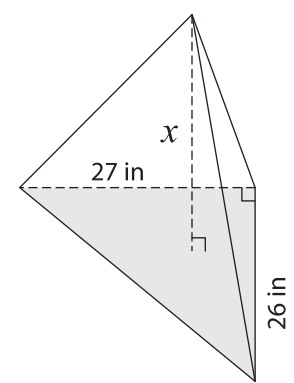


$x =$  \_\_\_\_\_

2) Volume =  $950 \text{ yd}^3$

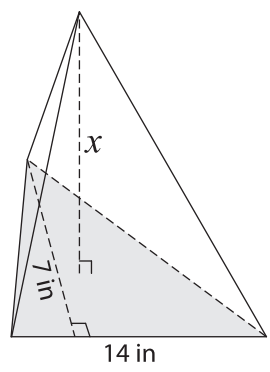


3) Volume =  $2,925 \text{ in}^3$



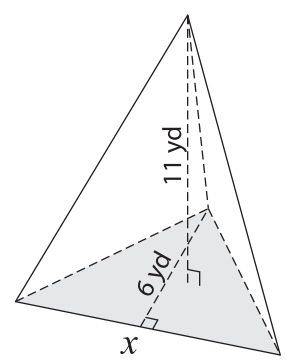
$x =$  \_\_\_\_\_

4) Volume =  $196 \text{ in}^3$



$x =$  \_\_\_\_\_

Volume =  $99 \text{ yd}^3$



$x =$  \_\_\_\_\_

## PREVIEW

Gain complete access to the largest collection of worksheets in all subjects!

Members, please log in to download this worksheet.

Not a member? Please sign up to gain complete access.

www.mathworksheets4kids.com

7) The height of a triangular triangle is 12 feet, determ

If the height of the base

\_\_\_\_\_

8) The base of a pyramid is a triangle with a base of 18 inches. If the volume of the triangular pyramid is 630 cubic inches and its height is 7 inches, find the height of the base triangle.

\_\_\_\_\_