

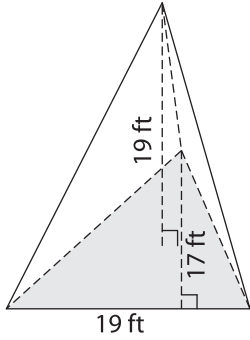
Name : _____

Volume - Triangular Pyramid

MS1

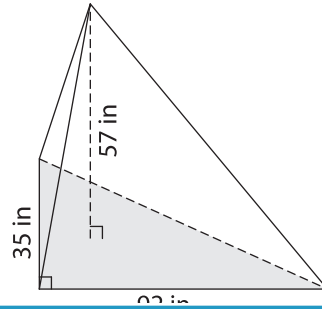
Find the volume of each triangular pyramid. Round your answer to two decimal places.

1)

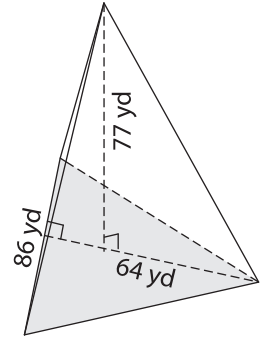


Volume = _____

2)

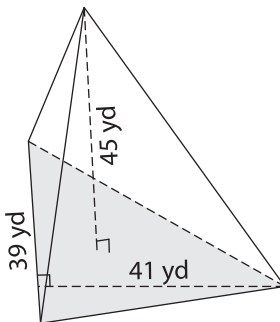


3)



Volume = _____

4)



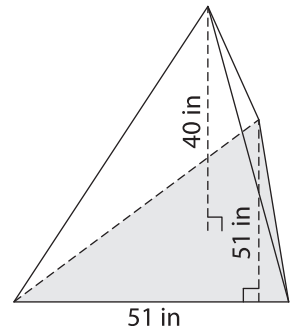
Volume = _____

PREVIEW
Gain complete access to the largest collection of worksheets in all subjects!

Members, please log in to download this worksheet.

Not a member? Please sign up to gain complete access.

www.mathworksheets4kids.com



Volume = _____

7) The base of a pyramid is a triangle with a base of 74 inches and a height of 21 inches. Find the volume of the pyramid, if its height is 68 inches.

74 inches. Find the volume of the pyramid, if its height is 68 inches.

8) The base of a pyramid is a triangle with a base of 28 yards and a height of 21 yards. Determine the volume of the pyramid, if its height is 68 yards.
