

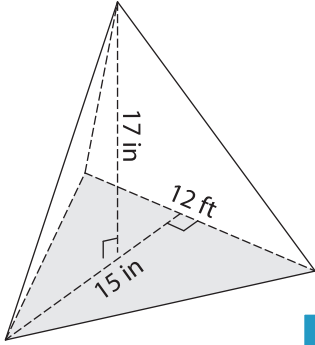
Name : _____

Volume - Triangular Pyramid

Sheet 1

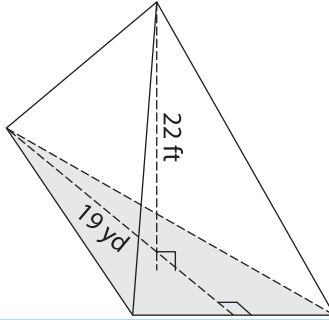
Find the volume of each triangular pyramid. Round your answer to two decimal places.

1)

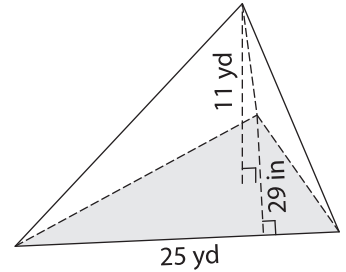


Volume = _____

2)

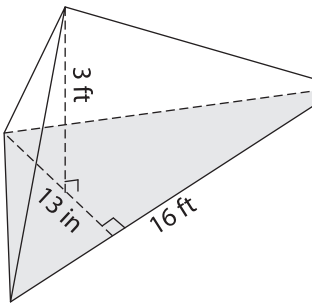


3)



Volume = _____ yd³

4)



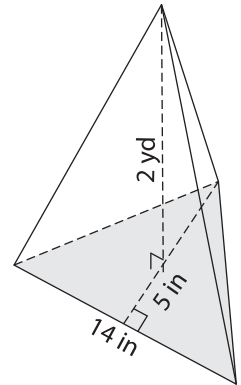
Volume = _____

PREVIEW
Gain complete access to the largest collection of worksheets in all subjects!

Members, please log in to download this worksheet.

Not a member? Please sign up to gain complete access.

www.mathworksheets4kids.com



Volume = _____ in³

7) The base of a pyramid is a right triangle with legs measuring 6 feet and 8 feet. If the height of the pyramid is 6 feet, find the volume.

_____ inches. If the height of the pyramid is 6 inches, find the volume.

8) The base of a pyramid is a right triangle with legs measuring 19 feet and 14 yards. If the height of the pyramid is 13 feet, determine its volume in cubic feet.