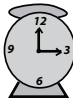




Weight Estimation - Metric Units

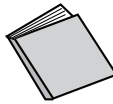

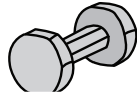
Sheet 3

Choose the object close to the given weight.



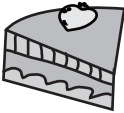
1) 3 grams

- 
- 
- 

2) 5 kilograms


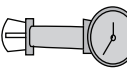

- 
- 
- 

3) 10 grams

- 
- 
- 



5) 40 grams

- 
- 
- 



PREVIEW




Gain complete access to the largest
collection of worksheets in all subjects!

Members, please
log in to
download this
worksheet.

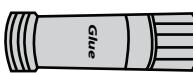


Not a member?
Please sign up to
gain complete
access.

www.mathworksheets4kids.com

7) 1.5 kilograms

- 
- 
- 

8) 3 kilograms

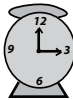


- 
- 
- 

Weight Estimation - Metric Units

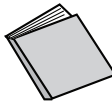


Sheet 3

Choose the object close to the given weight.



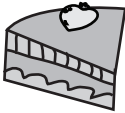
1) 3 grams

- 
- 
- 


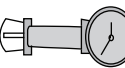

2) 5 kilograms

- 
- 
- 

3) 10 grams

- 
- 
- 

5) 40 grams

- 
- 
- 

PREVIEW




Gain complete access to the largest
collection of worksheets in all subjects!

Members, please
log in to
download this
worksheet.

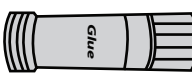

Not a member?
Please sign up to
gain complete
access.

www.mathworksheets4kids.com

7) 1.5 kilograms

- 
- 
- 

8) 3 kilograms

- 
- 
- 