

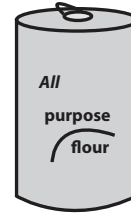
**Weight - More/Less**

Choose the correct choice that describes the weight of each object.

1)

 More than 2 lb     Less than 2 lb

2)

 More than 3 oz     Less than 3 oz

3)

 More than 5 lb

4)

 Less than 4 oz

5)

 More than 5 oz

**PREVIEW**

Gain complete access to the largest collection of worksheets in all subjects!

Members, please log in to download this worksheet.

Not a member? Please sign up to gain complete access.

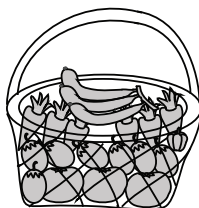
[www.mathworksheets4kids.com](http://www.mathworksheets4kids.com)

 Less than 15 lb


7)

 More than 1 lb     Less than 1 lb More than 10 oz     Less than 10 oz

9)

 More than 2 oz     Less than 2 oz

10)

 More than 25 oz     Less than 25 oz

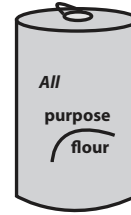
**Weight - More/Less**

Choose the correct choice that describes the weight of each object.

1)


 More than 2 lb     Less than 2 lb

2)


 More than 3 oz     Less than 3 oz

3)


 More than 5 lb

4)


 Less than 4 oz

5)


 More than 5 oz

**PREVIEW**

Gain complete access to the largest collection of worksheets in all subjects!

Members, please log in to download this worksheet.

Not a member? Please sign up to gain complete access.

[www.mathworksheets4kids.com](http://www.mathworksheets4kids.com)

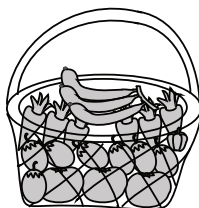

 Less than 15 lb

7)



 More than 1 lb     Less than 1 lb

 More than 10 oz     Less than 10 oz

9)


 More than 2 oz     Less than 2 oz

10)


 More than 25 oz     Less than 25 oz