


Weight - More/Less

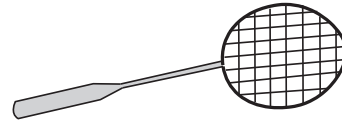
Choose the correct choice that describes the weight of each object.

1)



More than 2 oz Less than 2 oz

2)



More than 15 lb Less than 15 lb

3)



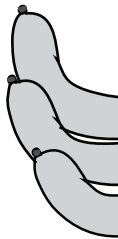
More than 9 oz

4)



Less than 10 oz

5)



More than 3 lb




Less than 2 oz

7)




More than 6 oz Less than 6 oz




More than 1 lb Less than 1 lb

9)



More than 4 oz Less than 4 oz

10)



More than 10 lb Less than 10 lb

PREVIEW

Gain complete access to the largest collection of worksheets in all subjects!

Members, please log in to download this worksheet.


Not a member? Please sign up to gain complete access.

www.mathworksheets4kids.com

Weight - More/Less

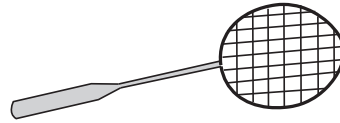
Choose the correct choice that describes the weight of each object.

1)



More than 2 oz Less than 2 oz

2)



More than 15 lb Less than 15 lb

3)



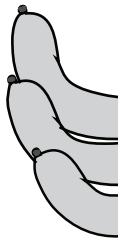
More than 9 oz

4)



Less than 10 oz

5)



More than 3 lb

PREVIEW
Gain complete access to the largest collection of worksheets in all subjects!

Members, please log in to download this worksheet.

Not a member? Please sign up to gain complete access.

www.mathworksheets4kids.com



Less than 2 oz

7)




More than 6 oz Less than 6 oz




More than 1 lb Less than 1 lb

9)



More than 4 oz Less than 4 oz

10)



More than 10 lb Less than 10 lb