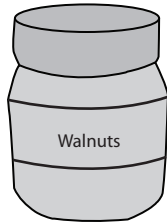


**Weight - More/Less**

Choose the correct choice that describes the weight of each object.

1)



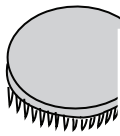
More than 20 lb     Less than 20 lb

2)



More than 2 oz     Less than 2 oz

3)



More than 15 oz

4)



Less than 3 lb

5)



More than 2 oz

**PREVIEW**  
Gain complete access to the largest collection of worksheets in all subjects!

Members, please log in to download this worksheet.

Not a member? Please sign up to gain complete access.

[www.mathworksheets4kids.com](http://www.mathworksheets4kids.com)



Less than 8 lb

7)

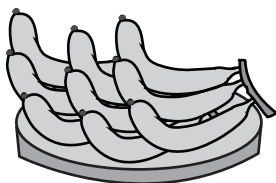


More than 4 lb     Less than 4 lb



More than 20 oz     Less than 20 oz

9)



More than 1 lb     Less than 1 lb

10)

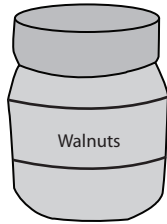


More than 1 oz     Less than 1 oz

**Weight - More/Less**

Choose the correct choice that describes the weight of each object.

1)



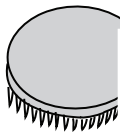
More than 20 lb     Less than 20 lb

2)



More than 2 oz     Less than 2 oz

3)



More than 15 oz

4)



Less than 3 lb

5)



More than 2 oz

**PREVIEW**  
Gain complete access to the largest collection of worksheets in all subjects!

Members, please log in to download this worksheet.

Not a member? Please sign up to gain complete access.

[www.mathworksheets4kids.com](http://www.mathworksheets4kids.com)



Less than 8 lb

7)

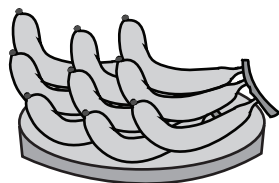


More than 4 lb     Less than 4 lb



More than 20 oz     Less than 20 oz

9)



More than 1 lb     Less than 1 lb

10)



More than 1 oz     Less than 1 oz