

Weight - More/Less

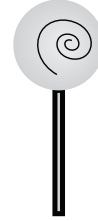
Metric Units: S3

Choose the correct choice that describes the weight of each object.

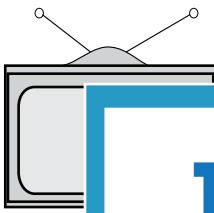
1)


 More than 10 kg Less than 10 kg

2)


 More than 250 g Less than 250 g

3)


 More than 1 kg

4)


 Less than 2 kg

5)


 More than 20 g


 Less than 10 g

7)

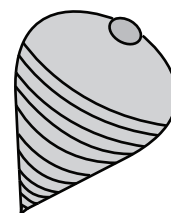

 More than 5 kg Less than 5 kg

 More than 100 g Less than 100 g

9)


 More than 700 g Less than 700 g

10)


 More than 5 g Less than 5 g
PREVIEW

Gain complete access to the largest collection of worksheets in all subjects!

Members, please log in to download this worksheet.

Not a member? Please sign up to gain complete access.

www.mathworksheets4kids.com

Weight - More/Less

Metric Units: S3

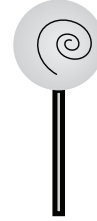
Choose the correct choice that describes the weight of each object.

1)



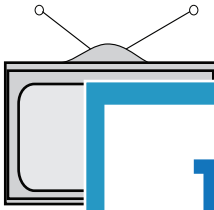
More than 10 kg Less than 10 kg

2)



More than 250 g Less than 250 g

3)



More than 1 kg

4)



Less than 2 kg

5)



More than 20 g

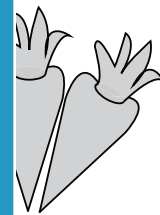


Less than 10 g

7)




More than 5 kg Less than 5 kg



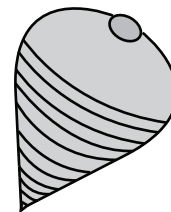
More than 100 g Less than 100 g

9)



More than 700 g Less than 700 g

10)



More than 5 g Less than 5 g

PREVIEW

Gain complete access to the largest collection of worksheets in all subjects!

Members, please log in to download this worksheet.

Not a member? Please sign up to gain complete access.

www.mathworksheets4kids.com