


**Measuring Weight - Metric Units**

DS3

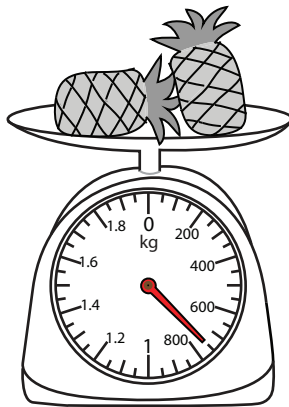
Measure the weight of each object.

1)




\_\_\_\_\_ g

2)



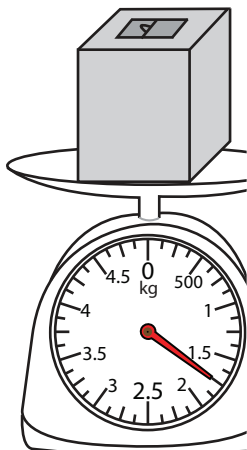
\_\_\_\_\_ kg

3)

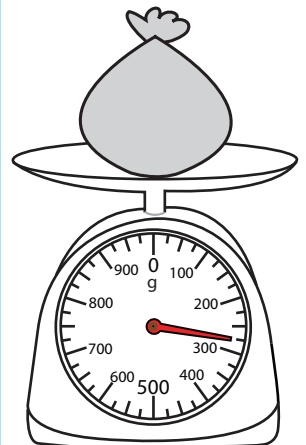


\_\_\_\_\_ kg

4)



\_\_\_\_\_ kg



\_\_\_\_\_ g

**PREVIEW**

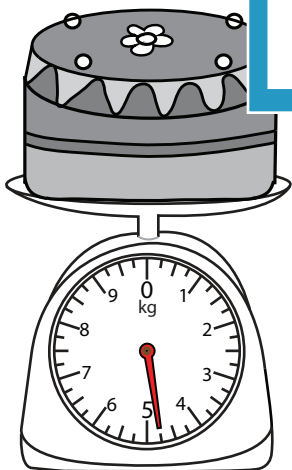
Gain complete access to the largest collection of worksheets in all subjects!

Members, please log in to download this worksheet.

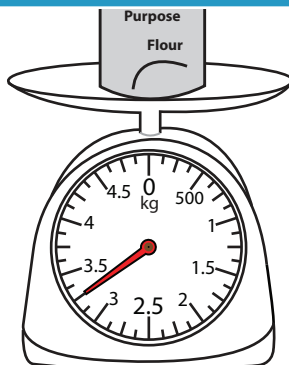
Not a member? Please sign up to gain complete access.

[www.mathworksheets4kids.com](http://www.mathworksheets4kids.com)

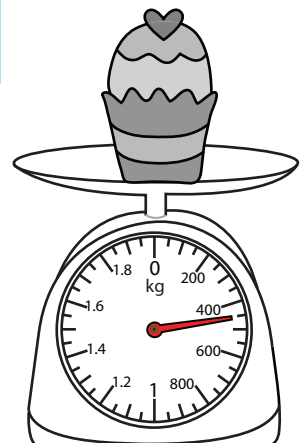
7)



\_\_\_\_\_ kg



\_\_\_\_\_ kg




\_\_\_\_\_ g

Measuring Weight - Metric Units

DS3

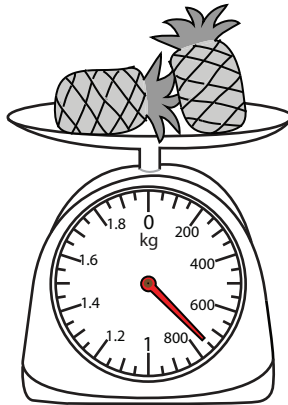
Measure the weight of each object.

1)




225

2)



1.8

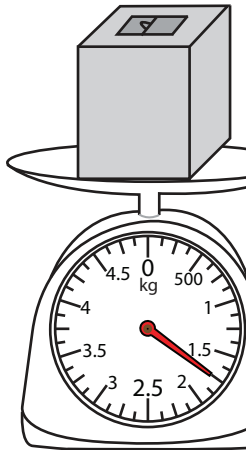
3)



4.125

kg

4)



1.75

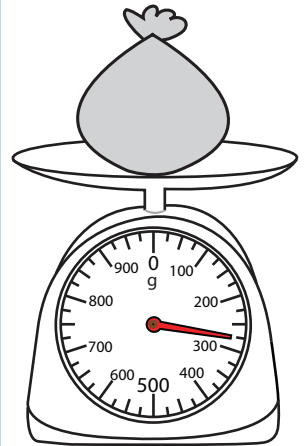
**PREVIEW**

Gain complete access to the largest collection of worksheets in all subjects!

Members, please log in to download this worksheet.

Not a member? Please sign up to gain complete access.

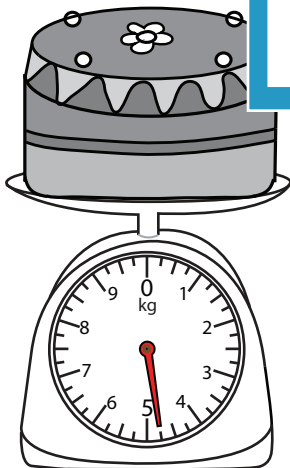
[www.mathworksheets4kids.com](http://www.mathworksheets4kids.com)



275

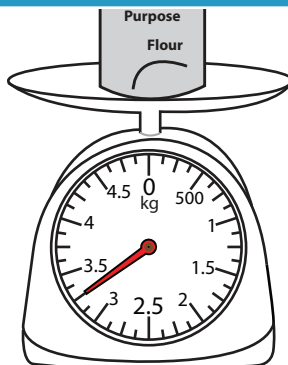
g

7)



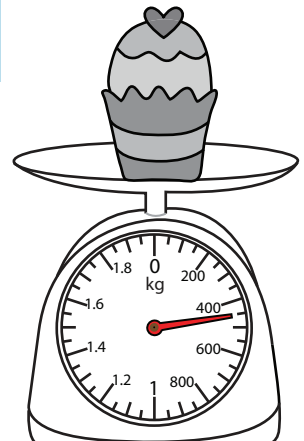
4.75

kg



3.25

kg



450

g