

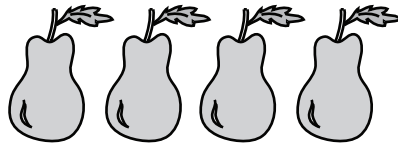
Weight Calculation - Metric Units

Calculate the weight.

1)

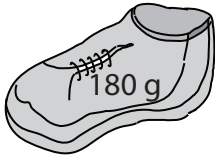


=



Weight of each  = _____ g

2)



=




Weight of each  = _____ g

3)

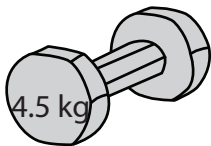


=

(


ch  = _____ g

4)



=

)


ch  = _____ kg

5)



=

9

ch  = _____ g

6)



=

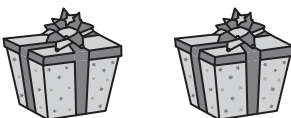


Weight of each  = _____ g

7)



=



Weight of each  = _____ g

PREVIEW

Gain complete access to the largest collection of worksheets in all subjects!

Members, please log in to download this worksheet.

Not a member? Please sign up to gain complete access.

www.mathworksheets4kids.com

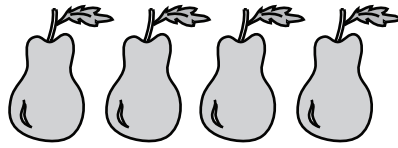
Weight Calculation - Metric Units

Calculate the weight.

1)



=



Weight of each  = **75** g

2)



=



Weight of each  = **60** g


3)



=

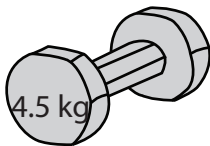
(

PREVIEW

ch  = **800** g

Gain complete access to the largest collection of worksheets in all subjects!

4)




=

(

Members, please log in to download this worksheet.

Not a member? Please sign up to gain complete access.


ch  = **1½** kg

5)



=

(


ch  = **700** g

www.mathworksheets4kids.com

6)



=

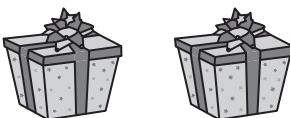


Weight of each  = **90** g

7)



=



Weight of each  = **750** g