
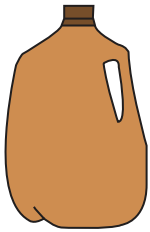


# Tall vs Short

Write 1 to 3 to show the order from tallest to shortest objects.

1)



2)



**PREVIEW**

Gain complete access to the largest collection of worksheets in all subjects!

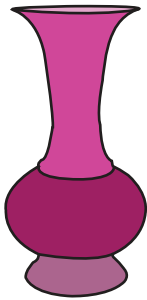
Members, please log in to download this worksheet.

Not a member? Please sign up to gain complete access.

[www.mathworksheets4kids.com](http://www.mathworksheets4kids.com)

Write 1 to 3 to show

3)



4)

