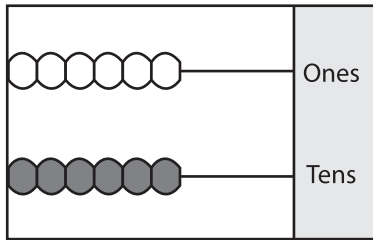


Place Value - Abacus

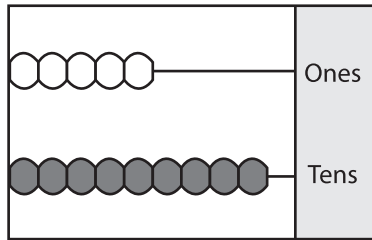
2-digit: S2

Write the number formed by each abacus.

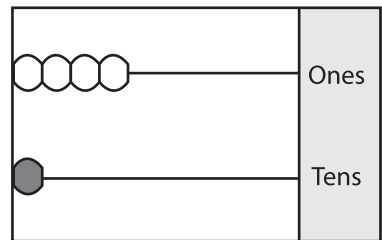
1)



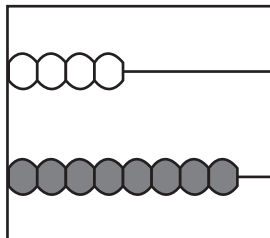
2)

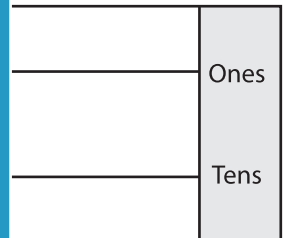


3)

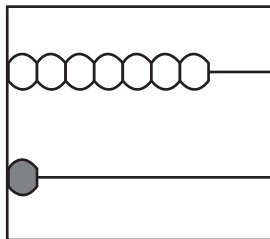


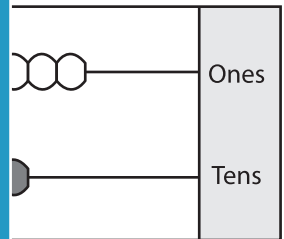
4)





7)





PREVIEW

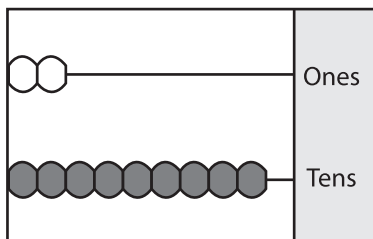
Gain complete access to the largest collection of worksheets in all subjects!

Members, please log in to download this worksheet.

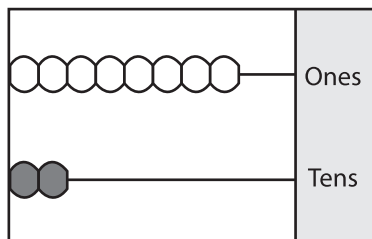
Not a member? Please sign up to gain complete access.

www.mathworksheets4kids.com

10)



11)



12)

