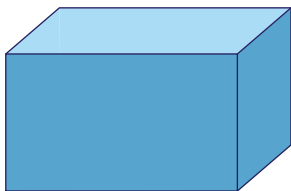


Name : _____

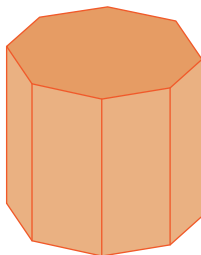
Naming the Prisms & Pyramids

A) Identify and name each prism.

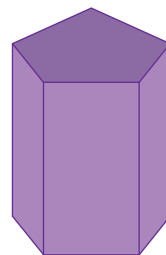
1)



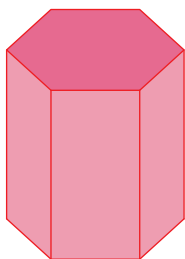
2)



3)



4)



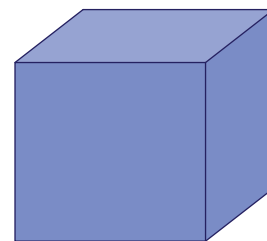
PREVIEW

Gain complete access to the largest collection of worksheets in all subjects!

Members, please log in to download this worksheet.

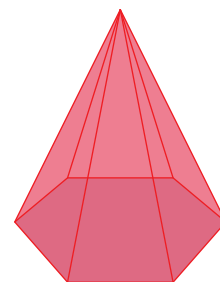
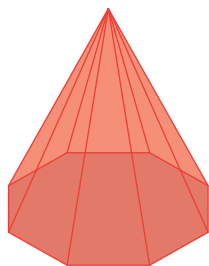
Not a member? Please sign up to gain complete access.

www.mathworksheets4kids.com

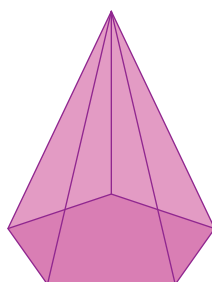


B) Identify and name

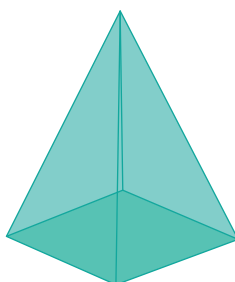
1)



4)



5)



6)

