



Describing Model: Equal Groups

Answer the questions that describe each model.

A)



1) How many nests are there?


2) How many eggs are there in each nest?

3) Write a multiplication sentence that describes the model.

_____ × _____ = _____

4) How many eggs are there altogether?

B)



1) How many flowerpots are there?

_____ flowerpots

2) How many flowers are there in each flowerpot?

_____ flowers

3) Write a multiplication sentence that describes the model.

_____ × _____ = _____

4) How many flowers are there altogether?

_____ flowers

PREVIEW

Gain complete access to the largest collection of worksheets in all subjects!

Members, please log in to download this worksheet.

Not a member? Please sign up to gain complete access.

www.mathworksheets4kids.com