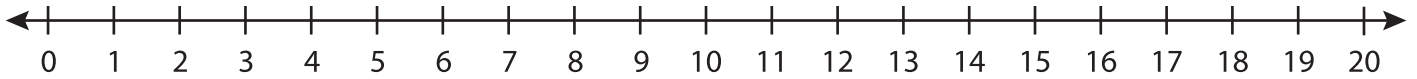


Number Line Multiplication

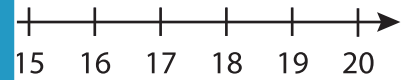
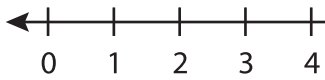
T1S1

Indicate hops on each number line and complete the multiplication sentences.

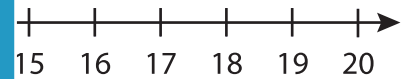
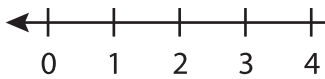
1) $4 \times 3 =$ _____



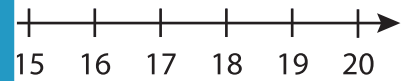
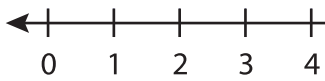
2) $5 \times 2 =$ _____



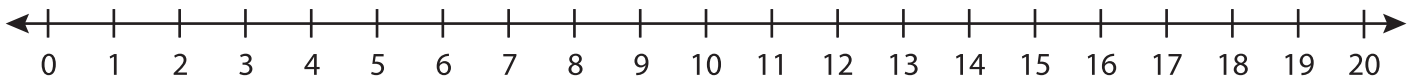
3) $2 \times 4 =$ _____



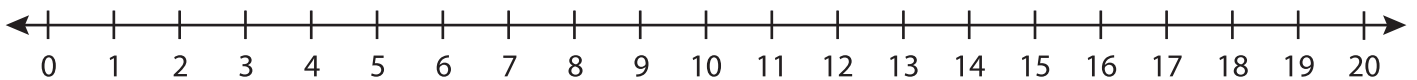
4) $3 \times 5 =$ _____



5) $9 \times 1 =$ _____



6) $7 \times 2 =$ _____



PREVIEW

Gain complete access to the largest
collection of worksheets in all subjects!

Members, please
log in to
download this
worksheet.

Not a member?
Please sign up to
gain complete
access.

www.mathworksheets4kids.com