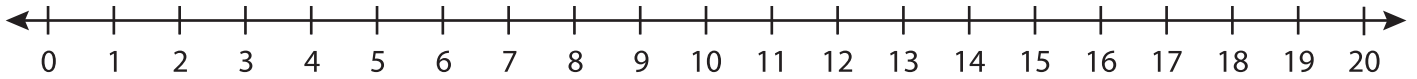


Number Line Multiplication

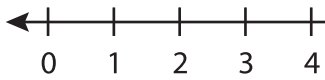
T1S5

Indicate hops on each number line and complete the multiplication sentences.

1) $6 \times 1 =$ _____



2) $5 \times 4 =$ _____



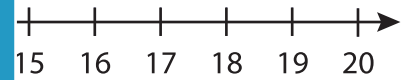
PREVIEW

Gain complete access to the largest
collection of worksheets in all subjects!

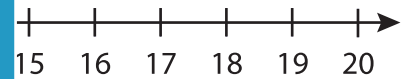
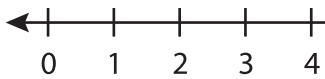
Members, please
log in to
download this
worksheet.

Not a member?
Please sign up to
gain complete
access.

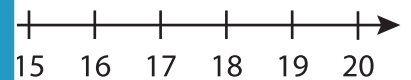
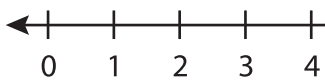
www.mathworksheets4kids.com



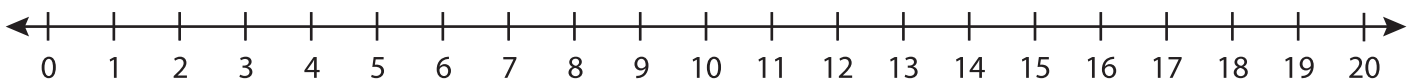
3) $1 \times 7 =$ _____



4) $2 \times 3 =$ _____



5) $4 \times 2 =$ _____



6) $2 \times 6 =$ _____

