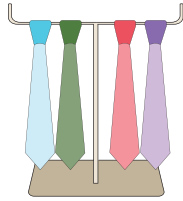


Multiplication Using Pictures


Sheet 1

1)



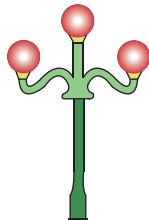
How many neckties will 4 such stands hold?

2)



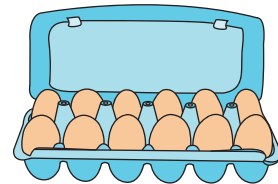
How many petals will 8 such flowers have?

3)




How many light bulbs will 9 such streetlamps have?

4)



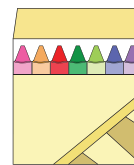
How many eggs will 2 such egg crates contain?

5)




How many drawers will 6 such chests have?

6)



How many crayons will 5 such boxes contain?

7)



How many cookies will 4 such plates contain?

8)



How many spoons will 5 such stands hold?
