

Name : _____

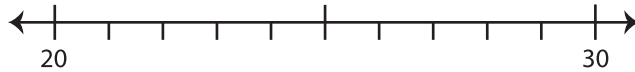
2-Digit: S1

Rounding: Number Line

Round each number to the nearest ten using number line.

1) 23

i) Label 23 on the number line.

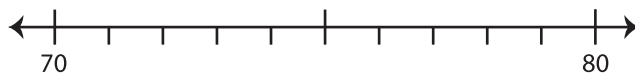


ii) Which is closer to 23? a) 20 b) 30

iii) 23 rounded to the nearest ten is _____

2) 78

i) Label 78 on the number line.

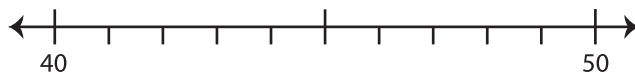


ii) Which is closer to 78? a) 70 b) 80

iii) 78 rounded to the nearest ten is _____

3) 44

i) Label 44 on the number line.

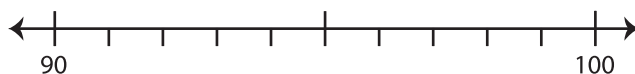


ii) Which is closer to 44? a) 40 b) 50

iii) 44 rounded to the nearest ten is _____

4) 96

i) Label 96 on the number line.



ii) Which is closer to 96? a) 90 b) 100

iii) 96 rounded to the nearest ten is _____