

Name : _____

Telling Time


1 Minute: S1

A) Read each clock, and write the time.

1)



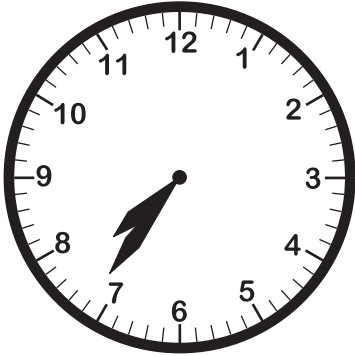
2)




3)




4)



5)




6)



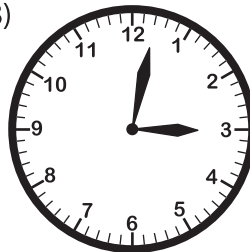
B) Choose the clock that shows the given time.

Time : 3:02

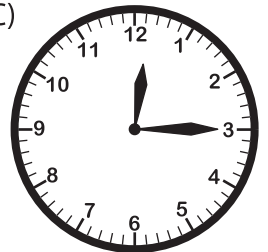
A)




B)



C)



C) Choose the correct time shown by the clock.



A)

5:59

B)

6:58

C)

11:30