




Lines, Rays or Line segments

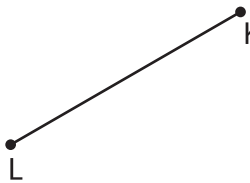
Example:

<p>A Line</p>  <p>\overleftrightarrow{PQ} or \overleftrightarrow{QP}</p>	<p>A Ray</p>  <p>\overrightarrow{TU}</p>	<p>A Line segment</p>  <p>\overline{YZ} or \overline{ZY}</p>
--	---	--

Part - A

Name each line, ray or line segment.

1)



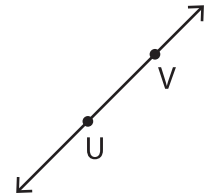
PREVIEW

Gain complete access to the largest collection of worksheets in all subjects!

Members, please log in to download this worksheet.

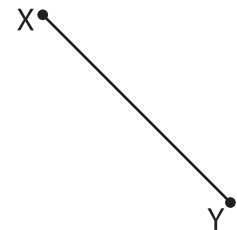
Not a member? Please sign up to gain complete access.

www.mathworksheets4kids.com



4)





Draw and label each of the following.

1) \overleftrightarrow{JK}

2) \overrightarrow{EF}

3) \overline{MN}