

Name : _____

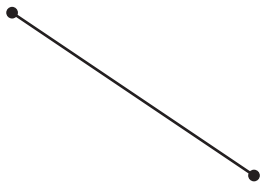
Points, Lines, Rays & Line segments

Sheet 1


Part - A

Write each as a point, line, ray or line segment.

1)




2)



3)



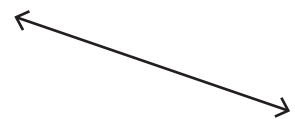
4)



5)



6)



Part - B

Draw the following.

1) A line

2) A ray

3) A line segment