

Name : \_\_\_\_\_

# Points, Lines, Rays & Line segments

## Part - A

Write each as a point, line, ray or line segment.

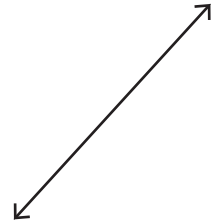
1)



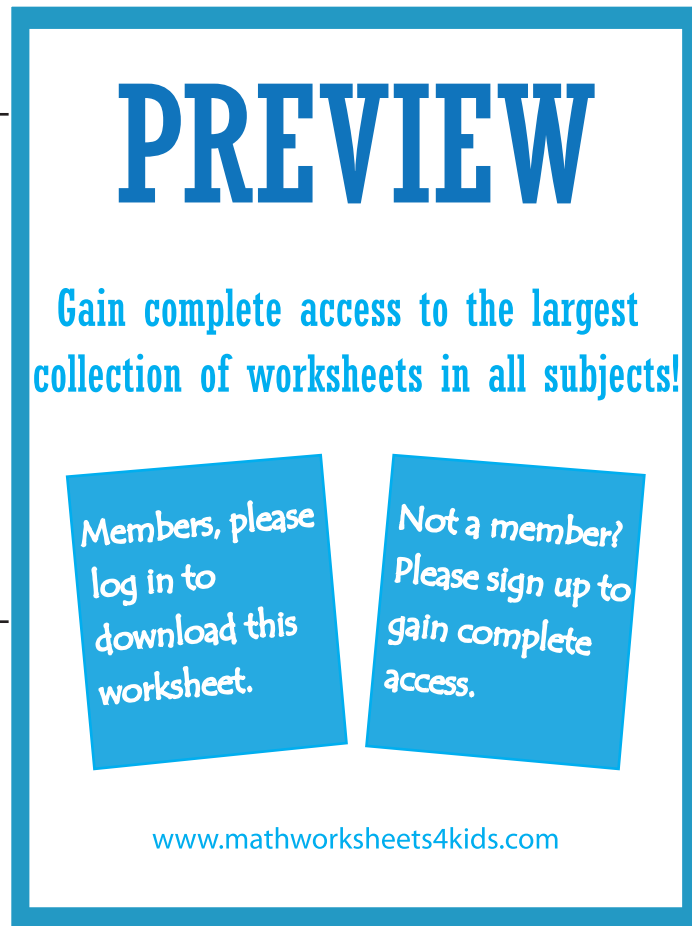
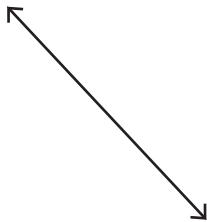
2)



3)



4)



**PREVIEW**

Gain complete access to the largest collection of worksheets in all subjects!

Members, please log in to download this worksheet.

Not a member? Please sign up to gain complete access.

[www.mathworksheets4kids.com](http://www.mathworksheets4kids.com)

Draw the following.

1) A line segment

A line