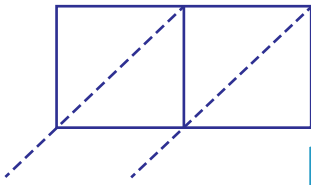


Lattice Multiplication

2-digit by 1-digit: S1

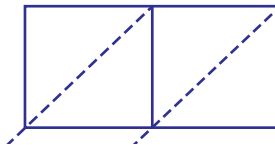
Use lattice multiplication method to find the product in each problem.

1) 32×6

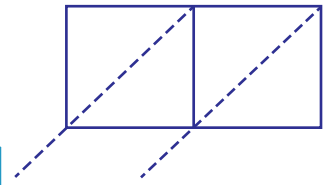


$32 \times 6 =$ _____

2) 45×2

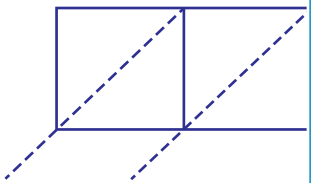
**PREVIEW**Gain complete access to the largest
collection of worksheets in all subjects!Members, please
log in to
download this
worksheet.Not a member?
Please sign up to
gain complete
access.www.mathworksheets4kids.com

3) 18×7



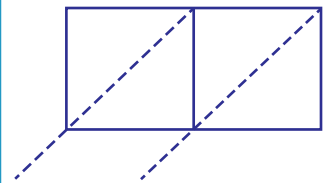
$18 \times 7 =$ _____

4) 67×3



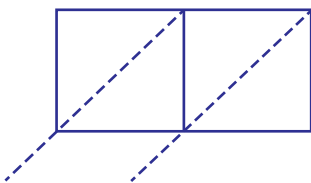
$67 \times 3 =$ _____

92×4

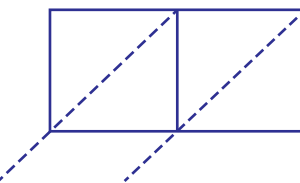


$92 \times 4 =$ _____

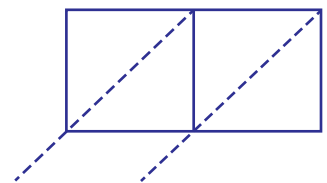
7) 21×5



$21 \times 5 =$ _____



$86 \times 1 =$ _____



74×9

$74 \times 9 =$ _____