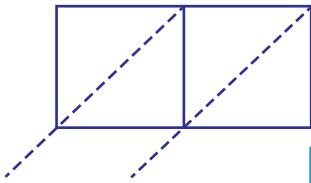


Lattice Multiplication

2-digit by 1-digit: S2

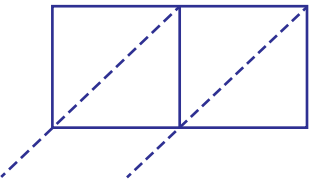
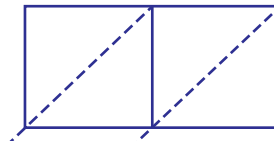
Use lattice multiplication method to find the product in each problem.

1) 58×3



$58 \times 3 =$ _____

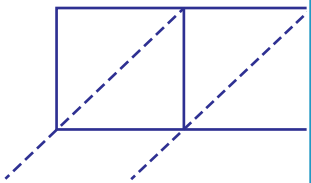
2) 94×6



3) 29×8

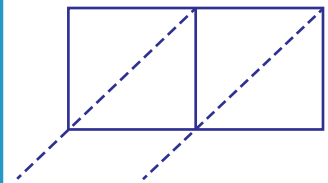
$29 \times 8 =$ _____

4) 70×9



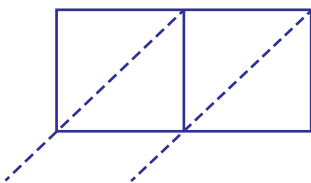
$70 \times 9 =$ _____

42×1

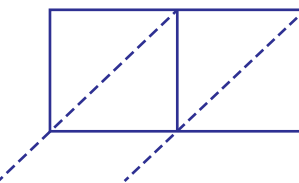


$42 \times 1 =$ _____

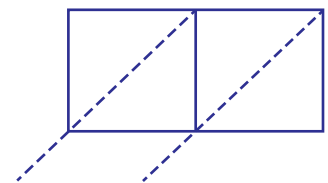
7) 88×5



$88 \times 5 =$ _____



$37 \times 2 =$ _____



61×7

$61 \times 7 =$ _____

PREVIEWGain complete access to the largest
collection of worksheets in all subjects!Members, please
log in to
download this
worksheet.Not a member?
Please sign up to
gain complete
access.www.mathworksheets4kids.com