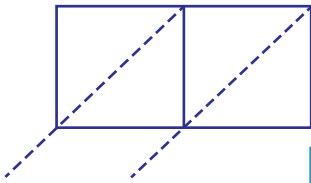


**Lattice Multiplication**

2-digit by 1-digit: S3

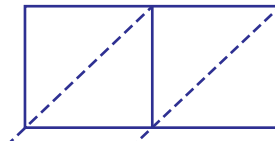
Use lattice multiplication method to find the product in each problem.

1)  $84 \times 2$



$84 \times 2 =$  \_\_\_\_\_

2)  $39 \times 4$

**PREVIEW**

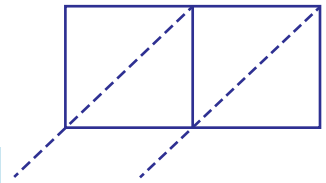
Gain complete access to the largest collection of worksheets in all subjects!

Members, please log in to download this worksheet.

Not a member? Please sign up to gain complete access.

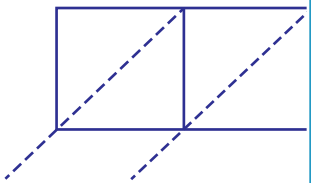
[www.mathworksheets4kids.com](http://www.mathworksheets4kids.com)

3)  $72 \times 1$



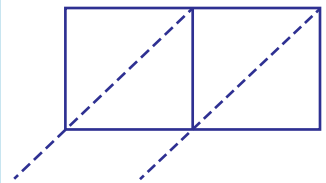
$72 \times 1 =$  \_\_\_\_\_

4)  $24 \times 7$



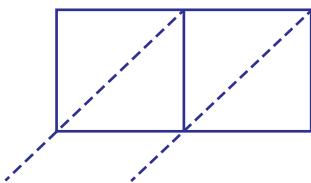
$24 \times 7 =$  \_\_\_\_\_

91  $\times$  5

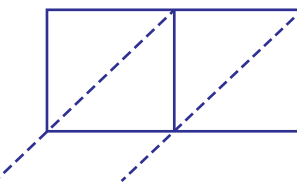


$91 \times 5 =$  \_\_\_\_\_

7)  $67 \times 3$

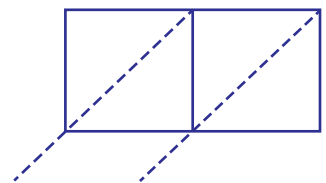


$67 \times 3 =$  \_\_\_\_\_



$12 \times 8 =$  \_\_\_\_\_

58  $\times$  6



$58 \times 6 =$  \_\_\_\_\_