









Identifying Shape Pattern









DS3

Complete the shape pattern.

1)

									
---	---	--	---	---	--	--	---	---	---

2)

									
--	---	---	---	---	---	--	---	---	---

3)

									
---	---	--	--	--	--	--	--	--	---

4)

									
--	--	--	--	--	--	--	--	--	--

5)

									
---	---	--	--	--	--	--	--	---	---

6)

									
---	--	--	--	--	--	--	--	---	---









7)

										
--	---	--	--	--	--	--	--	---	---	---









8)

									
---	---	---	--	---	---	--	--	---	---

9)

									
---	---	---	--	---	---	--	---	---	--

10)

									
---	---	---	---	--	---	--	--	---	---

PREVIEW

Gain complete access to the largest collection of worksheets in all subjects!

Members, please log in to download this worksheet.

Not a member? Please sign up to gain complete access.

www.mathworksheets4kids.com