

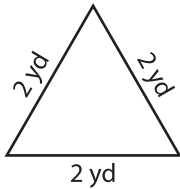
Name : \_\_\_\_\_

# Identifying Triangles

Sides - Numerals: S1

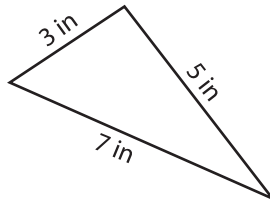
Identify each triangle based on sides. (Equilateral, Isosceles or Scalene)

1)

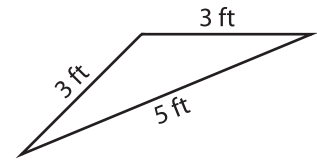


Equilateral triangle

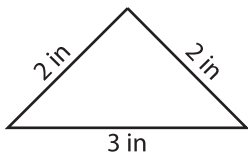
2)



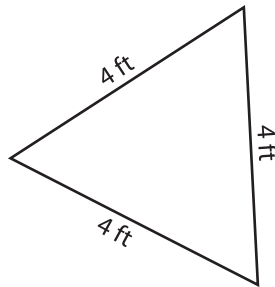
3)



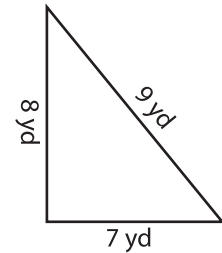
4)



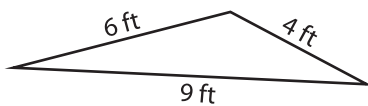
5)



6)



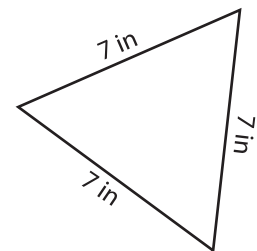
7)



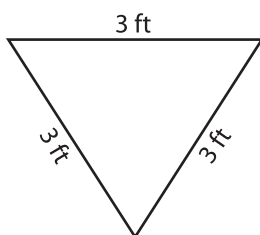
8)



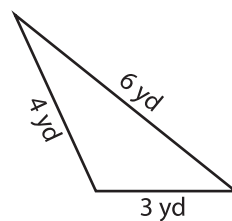
9)



10)



11)



12)

