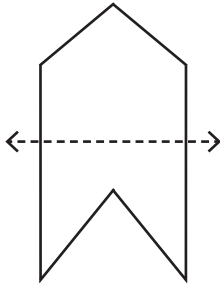


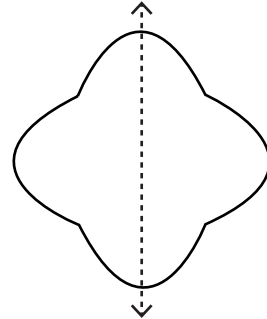
**Recognize the line of symmetry**

Is the dotted line on each shape a line of symmetry? Write yes or no.

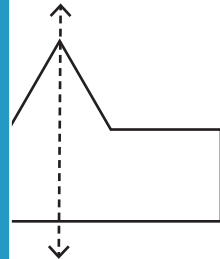
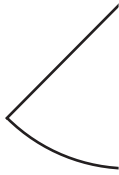
1)



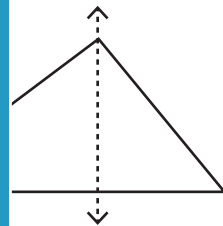
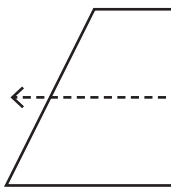
2)



3)



5)



**PREVIEW**

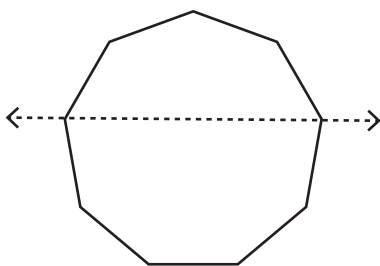
Gain complete access to the largest collection of worksheets in all subjects!

Members, please log in to download this worksheet.

Not a member? Please sign up to gain complete access.


[www.mathworksheets4kids.com](http://www.mathworksheets4kids.com)

7)



\_\_\_\_\_

8)



\_\_\_\_\_