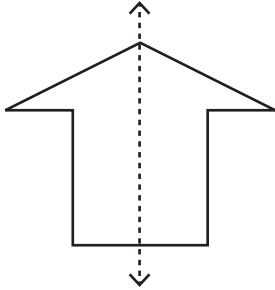


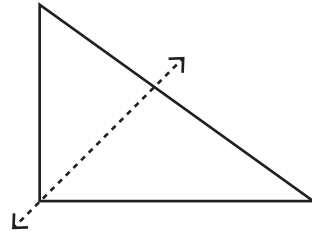
Recognize the line of symmetry

Is the dotted line on each shape a line of symmetry? Write yes or no.

1)



2)



3)



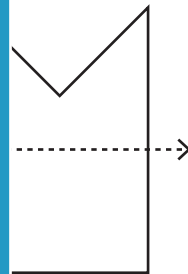
PREVIEW

Gain complete access to the largest collection of worksheets in all subjects!

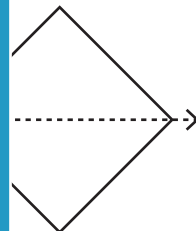
Members, please log in to download this worksheet.

Not a member? Please sign up to gain complete access.

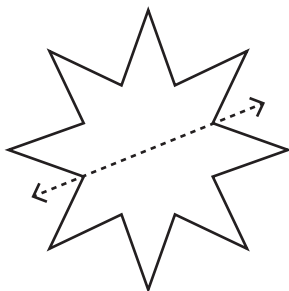
www.mathworksheets4kids.com



5)



7)



8)

