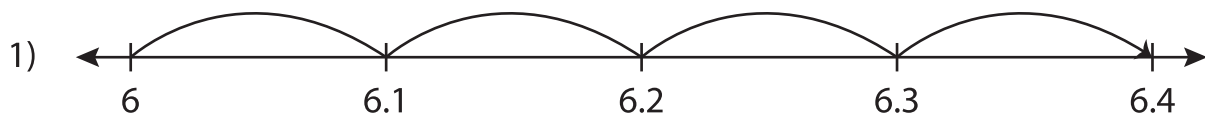


Name : \_\_\_\_\_

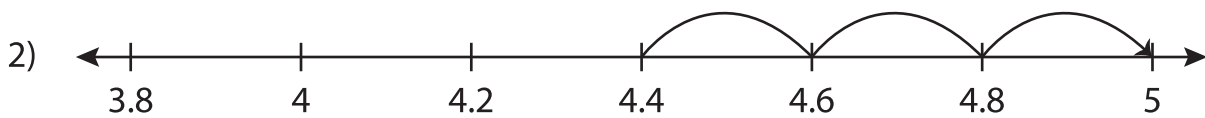
# Number Line Addition

Tenth: S1

Read each number line and solve the problem.



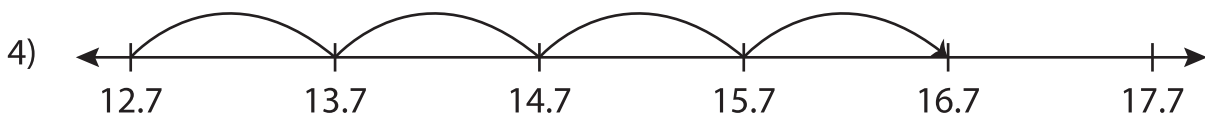
$$6 + 0.4 = \underline{\hspace{2cm}}$$



$$4.4 + 0.6 = \underline{\hspace{2cm}}$$



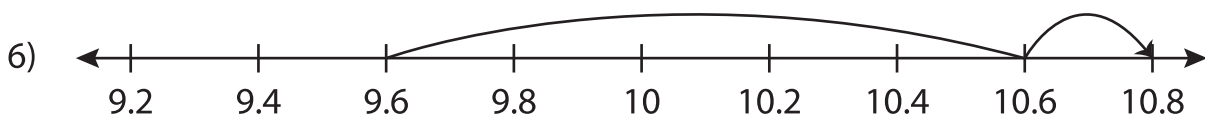
$$0.8 + 3.5 = \underline{\hspace{2cm}}$$



$$12.7 + 4 = \underline{\hspace{2cm}}$$



$$8.2 + 0.8 = \underline{\hspace{2cm}}$$



$$9.6 + 1.2 = \underline{\hspace{2cm}}$$