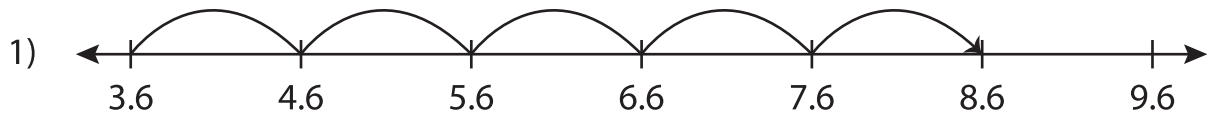


Name : _____

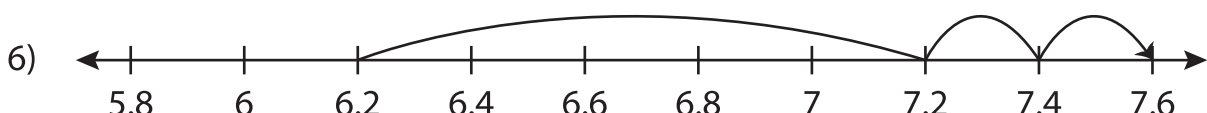
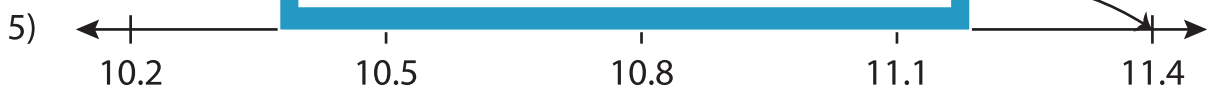
Number Line Addition

Tenth: S2

Read each number line and solve the problem.



$$3.6 + 5 = \underline{\hspace{2cm}}$$



$$6.2 + 1.4 = \underline{\hspace{2cm}}$$

PREVIEW

Gain complete access to the largest collection of worksheets in all subjects!

Members, please log in to download this worksheet.

Not a member? Please sign up to gain complete access.

www.mathworksheets4kids.com