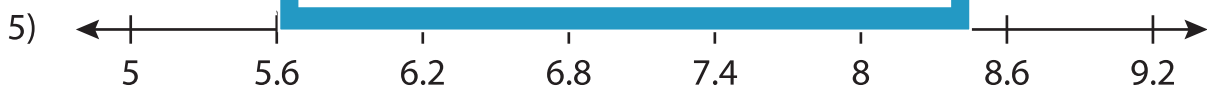
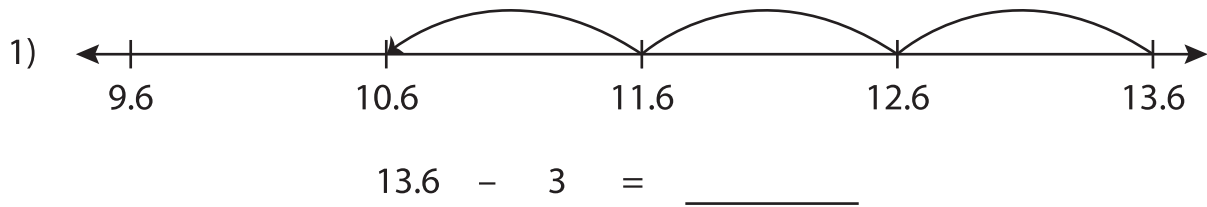


Name : _____

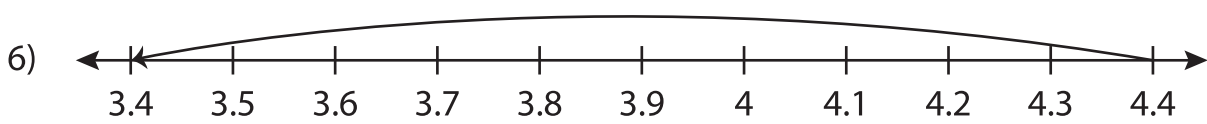
Number Line Subtraction

Tenth: S5

Read each number line and solve the problem.



$6.2 - 0.6 = \underline{\hspace{2cm}}$



$4.4 - 1 = \underline{\hspace{2cm}}$

PREVIEW

Gain complete access to the largest collection of worksheets in all subjects!

Members, please log in to download this worksheet.

Not a member? Please sign up to gain complete access.

www.mathworksheets4kids.com