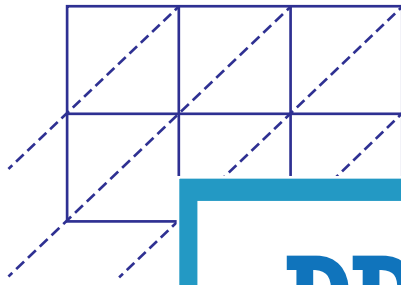


Lattice Multiplication

3-digit by 2-digit: S1

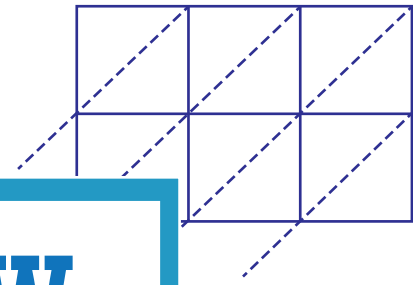
Use lattice multiplication method to find the product in each problem.

1) 498×61



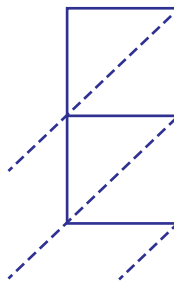
498×61

2) 923×37

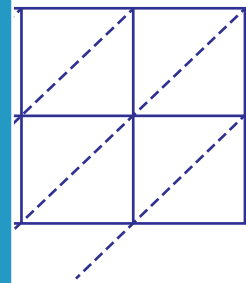


$=$ _____

3) 276×74

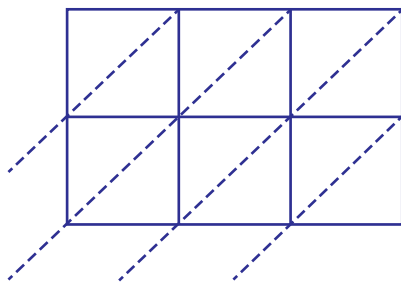


276×74

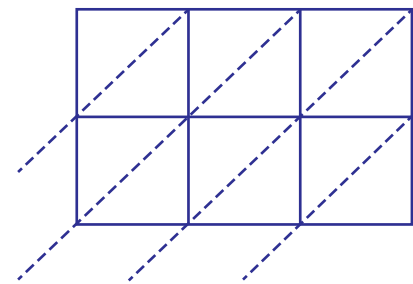


$=$ _____

5) 825×45



$825 \times 45 =$ _____



$351 \times 28 =$ _____

PREVIEW

Gain complete access to the largest
collection of worksheets in all subjects!

Members, please
log in to
download this
worksheet.

Not a member?
Please sign up to
gain complete
access.

www.mathworksheets4kids.com