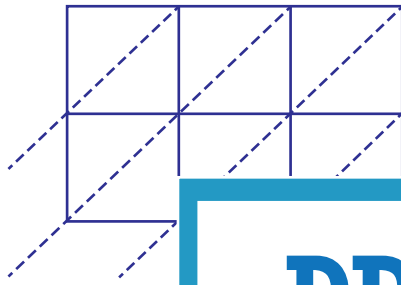


Lattice Multiplication

3-digit by 2-digit: S4

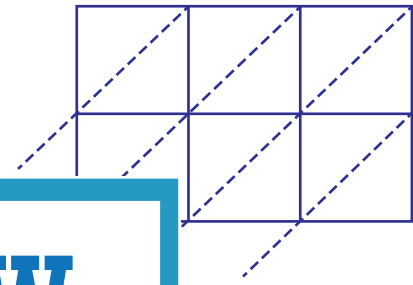
Use lattice multiplication method to find the product in each problem.

1) 697×51



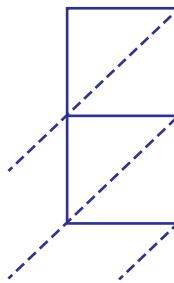
697×51

2) 842×76



) = _____

3) 924×83



924×83

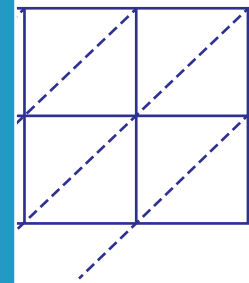
PREVIEW

Gain complete access to the largest
collection of worksheets in all subjects!

Members, please
log in to
download this
worksheet.

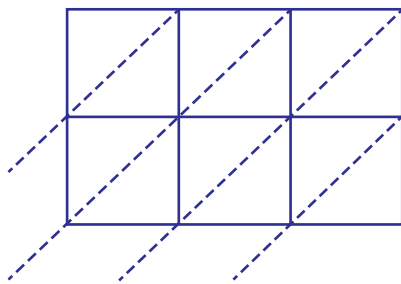
Not a member?
Please sign up to
gain complete
access.

www.mathworksheets4kids.com

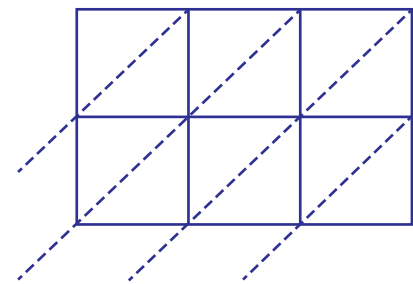


) = _____

5) 468×20



$468 \times 20 =$ _____



$381 \times 92 =$ _____