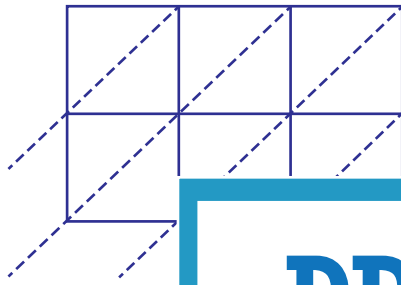


Lattice Multiplication

3-digit by 2-digit: S5

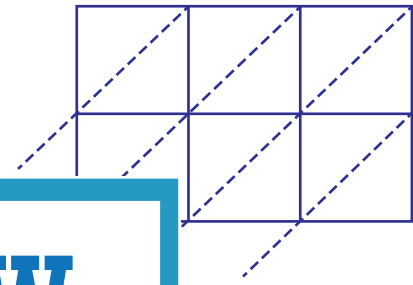
Use lattice multiplication method to find the product in each problem.

1) 372×90



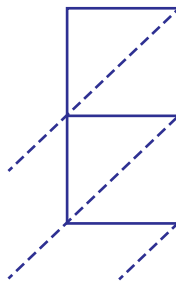
372×90

2) 719×18

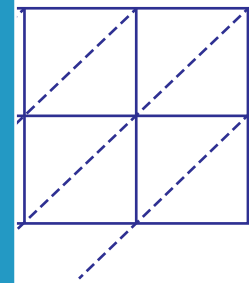


= _____

3) 564×27

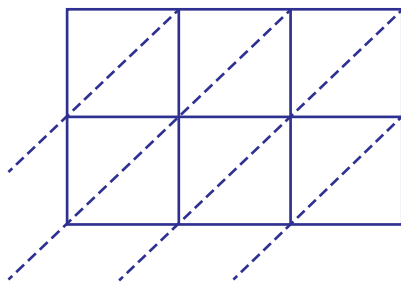


564×27

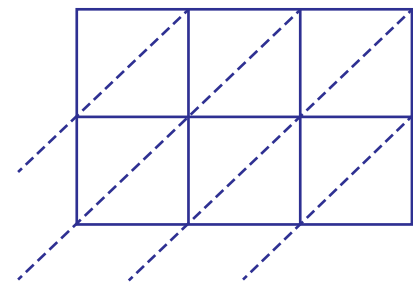


= _____

5) 836×62



$836 \times 62 =$ _____



$291 \times 84 =$ _____

PREVIEW

Gain complete access to the largest
collection of worksheets in all subjects!

Members, please
log in to
download this
worksheet.

Not a member?
Please sign up to
gain complete
access.

www.mathworksheets4kids.com