

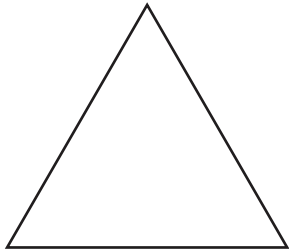
Name : _____

Identifying Triangles

Sides: S3

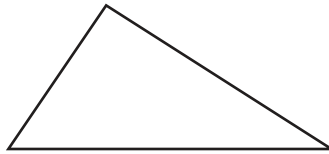
Identify each triangle based on sides. (Equilateral, Isosceles or Scalene)

1)

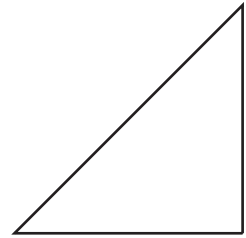


Equilateral triangle

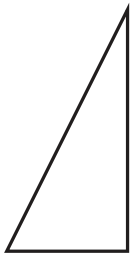
2)



3)



4)



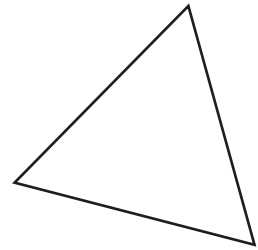
PREVIEW

Gain complete access to the largest collection of worksheets in all subjects!

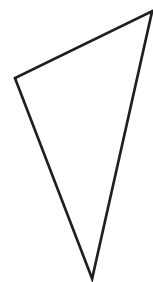
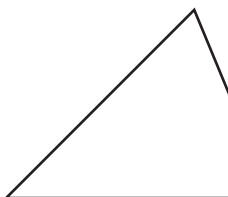
Members, please log in to download this worksheet.

Not a member? Please sign up to gain complete access.

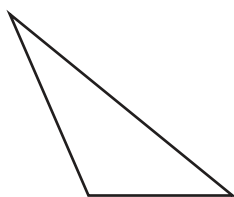
www.mathworksheets4kids.com



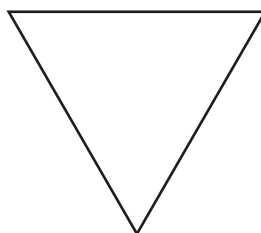
7)



10)



11)



12)

