
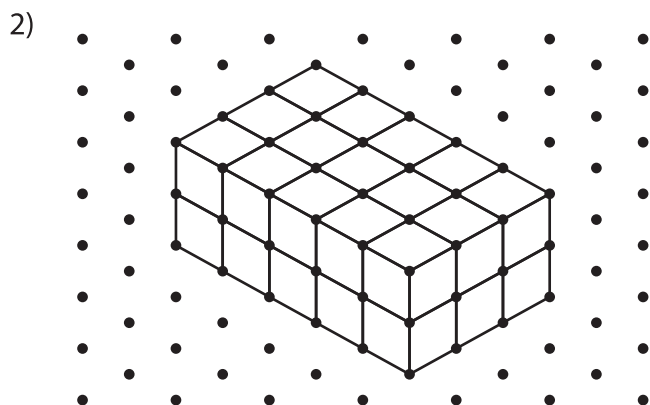
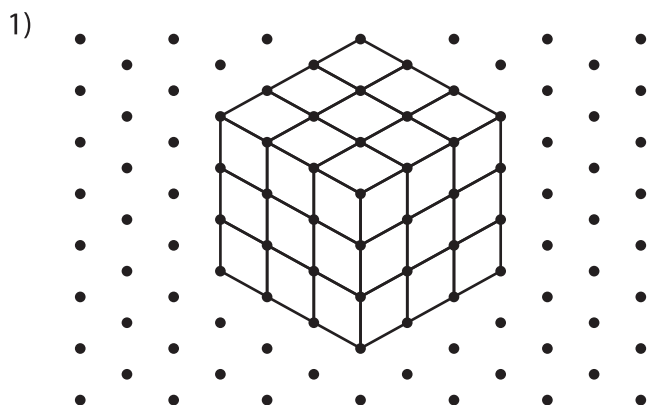


# Surface Area - Counting Squares

Find the surface area of each prism by counting the unit squares.

 = 1 mm<sup>2</sup>



Surface Area = \_\_\_\_\_

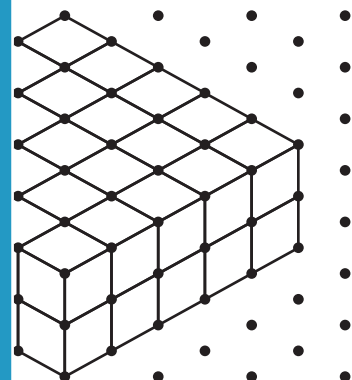
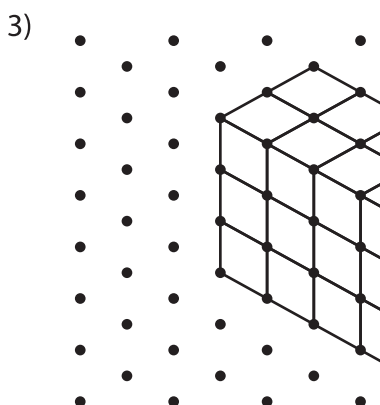
# PREVIEW

Gain complete access to the largest collection of worksheets in all subjects!

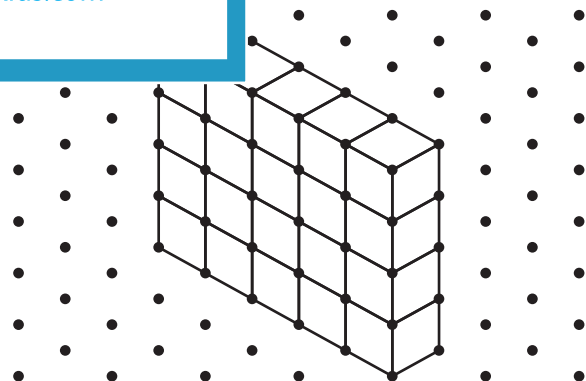
Members, please log in to download this worksheet.

Not a member? Please sign up to gain complete access.

[www.mathworksheets4kids.com](http://www.mathworksheets4kids.com)



Surface Area = \_\_\_\_\_



Surface Area = \_\_\_\_\_

Surface Area = \_\_\_\_\_