


Name : _____

Counting Cubes - Rectangular Prisms

ES3

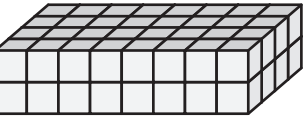

Count the unit cubes and find the volume of each rectangular prism.  = 1 m³

1)




Volume = _____

2)



Volume = _____

4)



Volume = _____

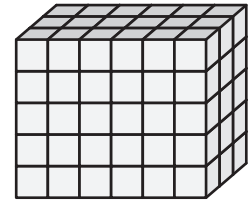
PREVIEW

Gain complete access to the largest collection of worksheets in all subjects!

Members, please log in to download this worksheet.


Not a member? Please sign up to gain complete access.

www.mathworksheets4kids.com




Volume = _____

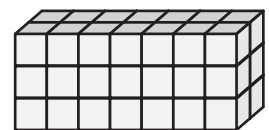
7)



Volume = _____



Volume = _____



Volume = _____