

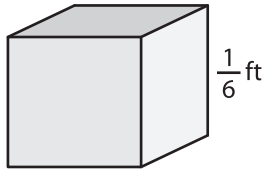
Name : _____

Volume - Cube

Sheet 1

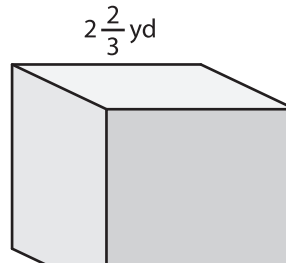
A) Find the volume of each cube.

1)



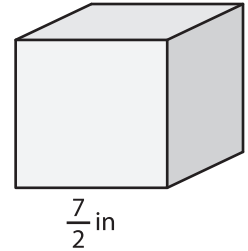
Volume = _____

2)



Volume = _____

3)



B) Find the volume of

PREVIEW
Gain complete access to the largest collection of worksheets in all subjects!

4) side length = $\frac{4}{9}$ ft

Volume = _____

Volume = _____

6) side length = $\frac{5}{7}$ in

Volume = _____

Volume = _____

8) If a side of an ice cube measures $1\frac{2}{3}$ inches, what is the total volume of 9 such ice cubes?
