

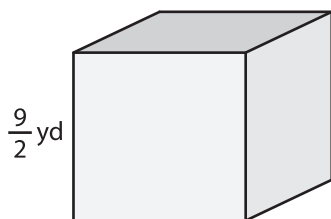
Name : _____

Volume - Cube

Sheet 2

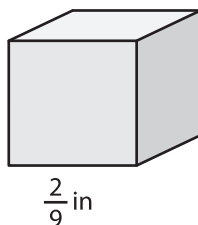
A) Find the volume of each cube.

1)



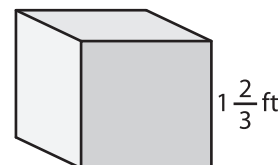
Volume = _____

2)



Volume = _____

3)



B) Find the volume of each cube.

4) side length = $1\frac{1}{4}$ yd

Volume = _____

6) side length = $\frac{7}{6}$ ft

Volume = _____

PREVIEW
Gain complete access to the largest
collection of worksheets in all subjects!

Members, please
log in to
download this
worksheet.

Not a member?
Please sign up to
gain complete
access.

www.mathworksheets4kids.com

side length = $\frac{3}{5}$ in

Volume = _____

side length = $\frac{5}{8}$ yd

Volume = _____

8) How much space does a $\frac{7}{2}$ -inch cubical gift box have?
