

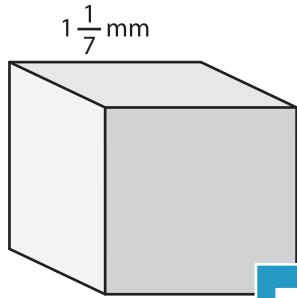
Name : \_\_\_\_\_

## Volume - Cube

Sheet 3

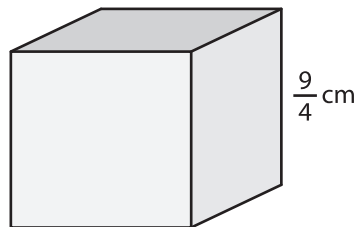
A) Find the volume of each cube.

1)



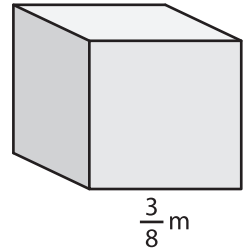
Volume = \_\_\_\_\_

2)



Volume = \_\_\_\_\_

3)



Volume = \_\_\_\_\_

B) Find the volume of

**PREVIEW**  
Gain complete access to the largest collection of worksheets in all subjects!

4) side length =  $\frac{5}{6}$  mm

Volume = \_\_\_\_\_

side length =  $\frac{1}{9}$  cm

Volume = \_\_\_\_\_

6) side length =  $2\frac{1}{3}$  m

Volume = \_\_\_\_\_

side length =  $\frac{9}{5}$  mm

Volume = \_\_\_\_\_

8) Shawn pieces a large cube together from 25 metal cubes. The side length of each metal cube is  $\frac{3}{2}$  cm. Find the volume of the large cube thus formed.

\_\_\_\_\_