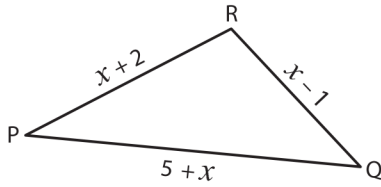


Missing Sides

Find the value of x and compute the length of the sides for each triangle.

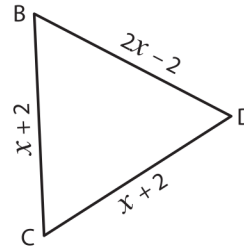
1)



Perimeter = 36 in ; $x =$ _____ ;

PQ = _____ ; QR = _____ ; PR = _____

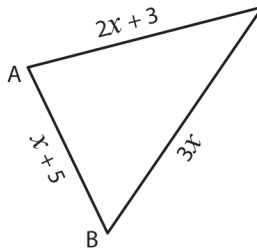
2)



Perimeter = 18 yd ; $x =$ _____ ;

BC = _____ ; CD = _____ ; BD = _____

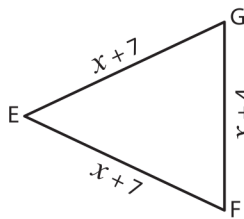
3)



Perimeter = 50 ft ; $x =$ _____

AB = _____ ; BC = _____

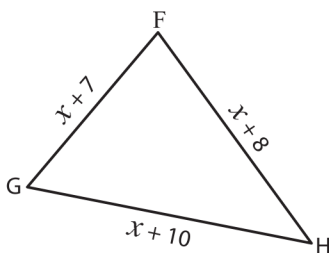
5)



Perimeter = 27 yd ; $x =$ _____

FG = _____ ; EF = _____

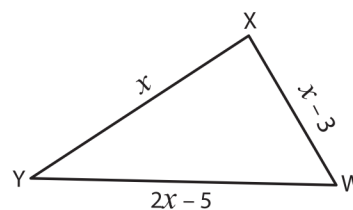
7)



Perimeter = 43 in ; $x =$ _____ ;

GH = _____ ; FH = _____ ; FG = _____

8)



Perimeter = 52 yd ; $x =$ _____ ;

XY = _____ ; WY = _____ ; WX = _____

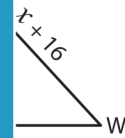
PREVIEW

Gain complete access to the largest collection of worksheets in all subjects!

Members, please log in to download this worksheet.

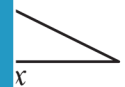
Not a member? Please sign up to gain complete access.

www.mathworksheets4kids.com



$x + 16 =$ _____ ;

_____ ; UW = _____



$x =$ _____ ;

_____ ; JL = _____