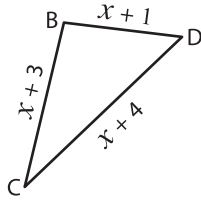


Missing Sides

Find the value of x and compute the length of the sides for each triangle.

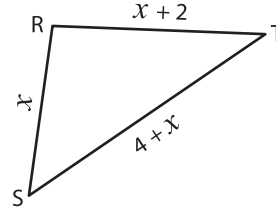
1)



Perimeter = 17 m ; $x =$ _____ ;

BC = _____ ; CD = _____ ; BD = _____

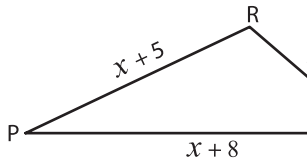
2)



Perimeter = 21 cm ; $x =$ _____ ;

RS = _____ ; ST = _____ ; RT = _____

3)



Perimeter = 36 mm ; $x =$ _____

PQ = _____ ; QR = _____

PREVIEW

Gain complete access to the largest
collection of worksheets in all subjects!

Members, please
log in to
download this
worksheet.

Not a member?
Please sign up to
gain complete
access.

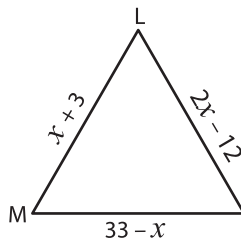
www.mathworksheets4kids.com



_____ ;

_____ ; TV = _____

5)



Perimeter = 54 cm ; $x =$ _____

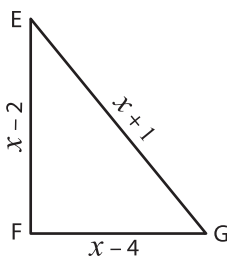
LM = _____ ; MN = _____



= _____ ;

_____ ; XZ = _____

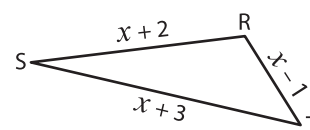
7)



Perimeter = 31 m ; $x =$ _____ ;

EF = _____ ; FG = _____ ; EG = _____

8)



Perimeter = 16 cm ; $x =$ _____ ;

RS = _____ ; ST = _____ ; RT = _____