

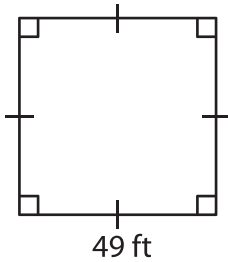
Name : _____

Area – Quadrilateral

L2S1

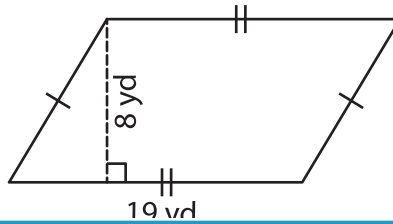
Find the area of each quadrilateral.

1)

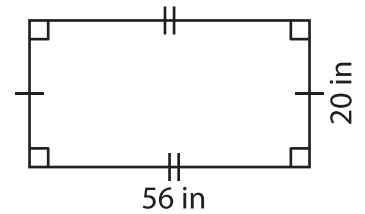


Area = _____

2)

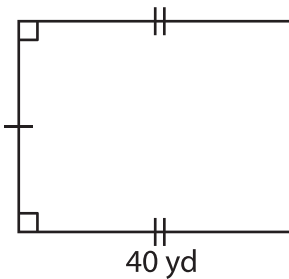


3)



Area = _____

4)



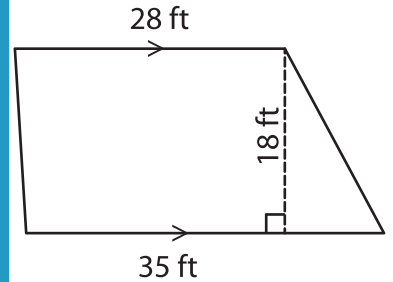
Area = _____

Gain complete access to the largest collection of worksheets in all subjects!

Members, please log in to download this worksheet.

Not a member? Please sign up to gain complete access.

www.mathworksheets4kids.com



Area = _____

7) The sum of the lengths respectively. Determine

ches and 6 inches

8) A parallelogram has a height of 3 feet and a base of 4 feet. What is the area of the parallelogram?
